



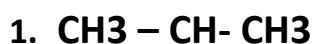
Name:

Date:

Grade:

### Worksheet

Write the IUPAC name for each of the following compounds

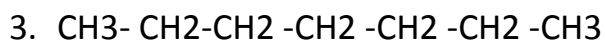


|

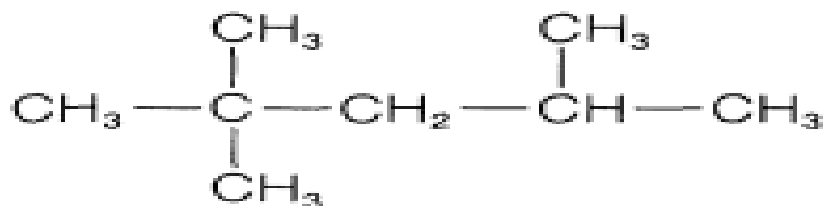


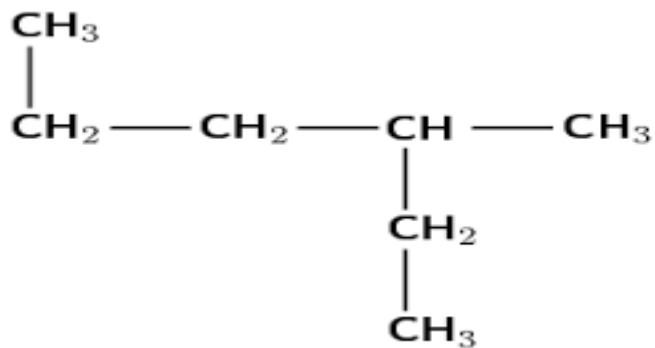
|

|



4.

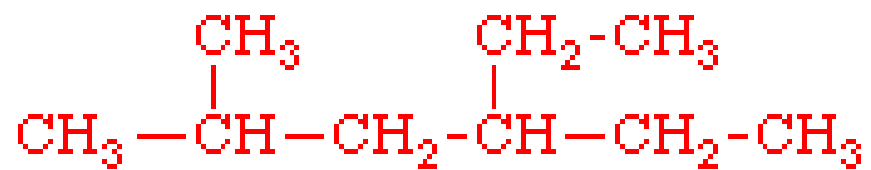




5.

6. CH<sub>3</sub>- CH<sub>2</sub>- CH<sub>3</sub>

7.



8.

Developmental Action Without Borders

NABA'A

Reg: 104\AD



جمعية عمل تنموي بلا حدود

نبع

علم وخبر: 104/أد

